

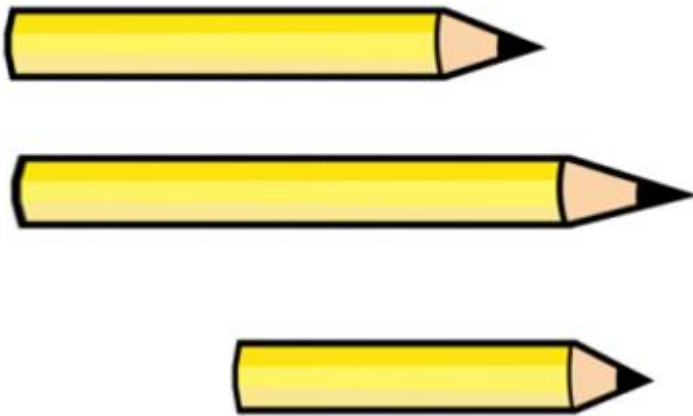
Please watch the videos on the following website to support your child's learning:

<https://whiterosemaths.com/homelearning/year-1/>

White Rose will no longer be providing worksheets to go alongside these videos so we have made the following activities that your child can complete **throughout the week**. These activities are all around the topics 'length, height, capacity and mass' and should therefore link to the White Rose videos.

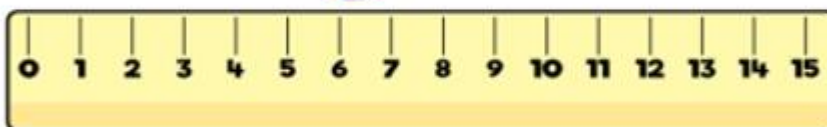
Activity 1

Circle the longest pencil.



True or False ?

The  is 7cm long ?



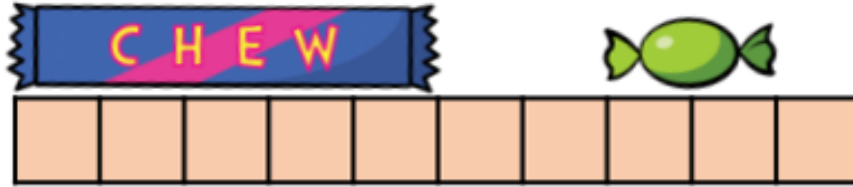
True


False


The  is ____ cm long.

Activity 1 continued

Dexter is measuring using squares.

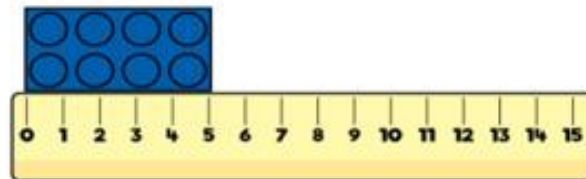


How many squares long is the ? squares

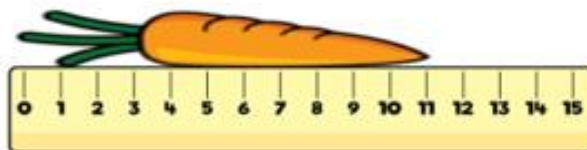
How many squares long is the ? squares

How much longer is the  squares
than the  ?

Ron measures some objects.



The  is cm long.



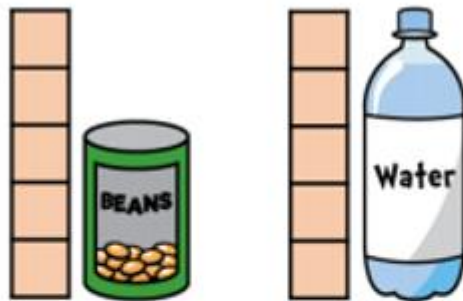
The  is cm long.


Activity 2


Order from tallest to shortest. Number them 1-4.





Tick the correct sentences.



The  is 5 squares tall.

The  is 5 squares tall.

The  is 2 squares shorter than the .

Activity 3

Complete the sentences.



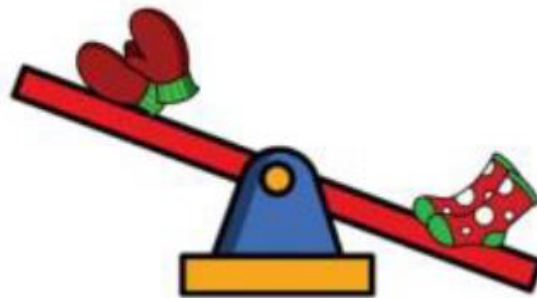
The ball is _____ than the suitcase.

Circle the correct word

heavier

lighter

Complete the sentences.



The gloves are _____ than the socks.

Circle the correct word

heavier

lighter

Activity 4

Colour the glasses to make the statements correct.



The glass is
almost full.



The glass is
full.





The glass is
empty.



It takes 5 bottles of water to fill 1 fish tank.





=



How many  will it take to fill 2 ? _____

How many  will it take to fill 3 ? _____

How many  can be filled with 20 ? _____

Activity 5

Measure Length



True or False?

The truck and the train are the same length because they are both 4 bricks long.



The height of the doll's house is 10 blocks.



Both boxes are 3 cars long.