

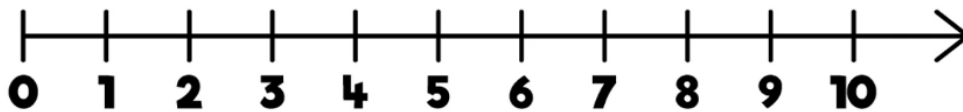
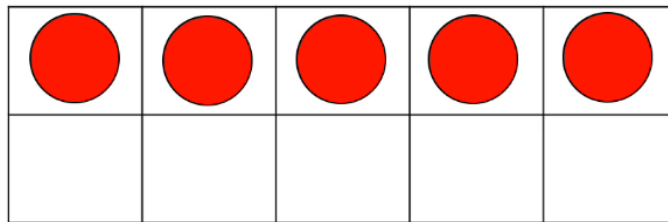
Please watch the videos on the following website to support your child's learning:

<https://whiterosemaths.com/homelearning/year-1/>

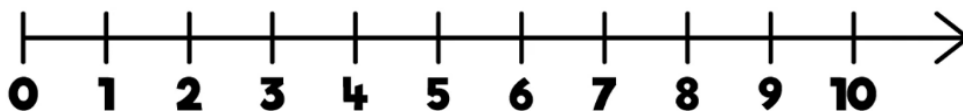
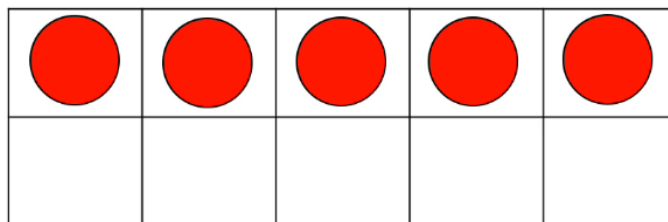
White Rose have advised us that they will no longer be providing worksheets to go alongside these videos so we have made the following activities that your child can complete **throughout the week**. These activities are all around the topic 'addition and subtraction' and should therefore link to the White Rose videos.

## Activity 1

What is 2 more than 5?

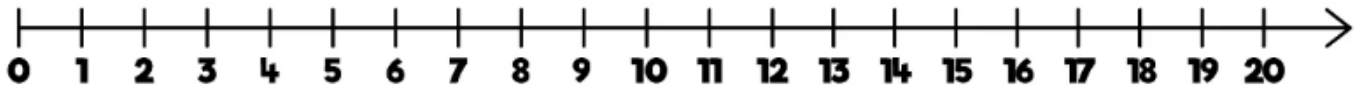
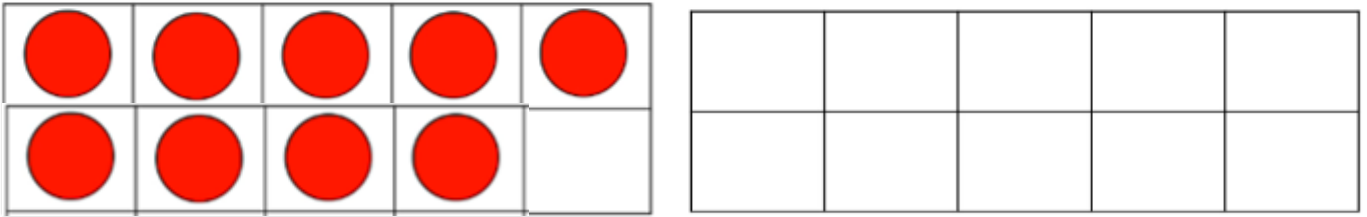


What is 4 more than 5?

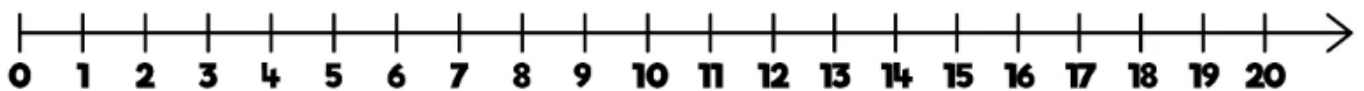
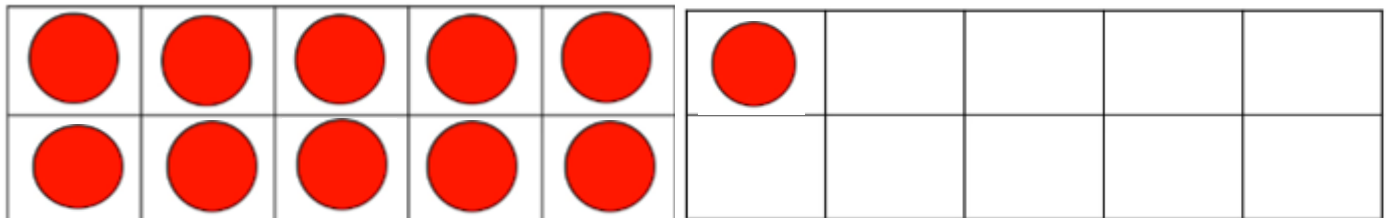


## Activity 1 continued

What is 3 more than 9?



What is 5 more than 11?



## Activity 2



### Number Line Addition

Example:	
$\underline{4} + 1 = \textcircled{5}$	

$3 + 3 =$	
$8 + 1 =$	
$6 + 4 =$	
$2 + 5 =$	
$9 + 2 =$	

$7 + 9 =$	
$12 + 5 =$	
$13 + 6 =$	
$4 + 11 =$	
$5 + 13 =$	

# Activity 3



## Number Line Subtraction

Example:	
$\underline{10} - 5 = \textcircled{5}$	

$3 - 1 =$	
-----------	--

$7 - 3 =$	
-----------	--

$2 - 2 =$	
-----------	--

$3 - 1 =$	
-----------	--

$11 - 8 =$	
------------	--

$20 - 17 =$	
-------------	--

$12 - 4 =$	
------------	--

$18 - 12 =$	
-------------	--

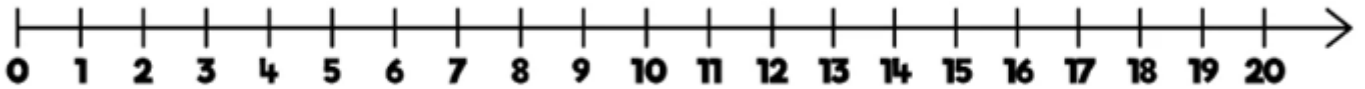

$10 - 3 =$	
------------	--

$17 - 5 =$	
------------	--

### Activity 4

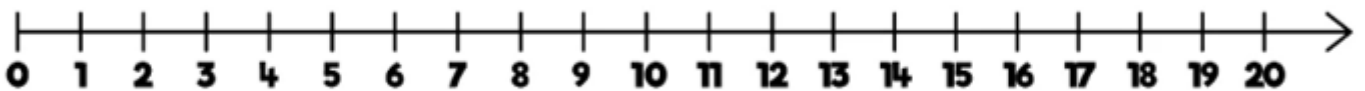

Tom has 16 apples and Bill has 3 more.

What is the total number of apples?



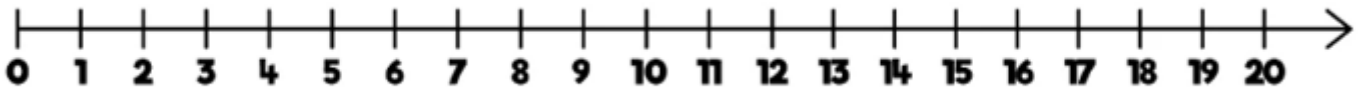

I have 13 sweets. Kim has 6 more than me.

How many sweets does Kim have?



## Activity 4 continued

If you had 20 plums and you use 13 to make jam, how many would you have left?



If you had 20 milk cartons and drink 2 of them, how many would you have left?

